



Supply & Demand Sort


SUPPLY AND Demand	
Supply	Demand
How much of a good that is available.	How much of something that people want.
 The price of something will go up if the demand goes up.	
The price of something will go down if the demand goes down.	

Directions: Watch video BrainPop Supply & Demand
Link <https://www.youtube.com/watch?v=b9bWNBOItNc>

Next, complete Supply & Demand Sort. Cut out and glue each statement into the correct section:
High Demand & Low Supply or
Low Demand & High Supply



What is Supply & Demand?



Glue supply or demand statements in the correct column

High Demand & Low Supply	Low Demand & High Supply

Directions: Cut out supply or demand statements and glue into the correct side of the Supply & Demand Chart

In the month of December, sunscreen goes on sale for 50% off the price it sells for in July.

What is the supply & demand for sunscreen?

Think to yourselves do people in North Carolina usually use sunscreen in December?



The new book series has just been released, and all school aged children want the book, but your bookstore only receives a few copies. The price of the book increases. What is the supply & demand for the new book?



A new toy was released and it is Christmas season the most popular toy increases in price because many kids want it. What is the supply & demand for the popular toy?



The video game "Extreme Skateboarding II" has just been released, and the older version "Extreme Skateboarding" goes on sale. What is the supply & demand for "Extreme Skateboarding?"




A shoe store is having a sale on all of last year's shoe styles. What is the supply & demand for last year's shoes?



A store is running low on Valentine's Day cards during the month of February. What is the supply & demand for Valentine's Day cards?



During the Thanksgiving season, the price of turkey increases. What is the supply & demand for Turkey?



When the newest version of the iPad came out, the older version went on sale. What is the demand for the older iPad?

